




# ADDITION PRACTICE



Name: \_\_\_\_\_ Date: \_\_\_\_\_

 1.OA.1  
1.OA.5  
1.NBT.1  
1.MD.3

1. Count the objects to help you solve the problem.



$$3 + 2 = \underline{\hspace{2cm}}$$



2. Write the number of objects.



3. There were 4 fish in the water. Two more fish came. How many fish were in the water altogether?

$$\underline{\hspace{2cm}} + \underline{\hspace{2cm}} = \underline{\hspace{2cm}}$$

4. Write the time shown on the clock.



5. Write the number of objects.

